
















GINGERBREAD ADDITION

NAME _____

Complete the addition problems, use the gingerbread men to help you!

| | |
|--|--|
| $5 + 2 = \square$   | $3 + 3 = \square$   |
| $6 + 3 = \square$   | $1 + 4 = \square$   |
| $5 + 5 = \square$   | $4 + 4 = \square$   |
| $3 + 1 = \square$   | $0 + 3 = \square$  |