

Student Name: \_\_\_\_\_

Score: \_\_\_\_\_

**Vertex and Sides Formed by Angles**

Name the vertex and sides formed by the angles:



Vertex: \_\_\_\_\_ Sides: \_\_\_\_\_



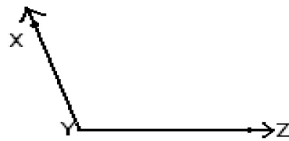
Vertex: \_\_\_\_\_ Sides: \_\_\_\_\_



Vertex: \_\_\_\_\_ Sides: \_\_\_\_\_



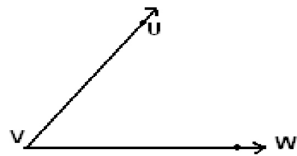
Vertex: \_\_\_\_\_ Sides: \_\_\_\_\_



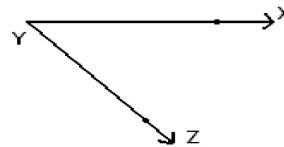
Vertex: \_\_\_\_\_ Sides: \_\_\_\_\_



Vertex: \_\_\_\_\_ Sides: \_\_\_\_\_



Vertex: \_\_\_\_\_ Sides: \_\_\_\_\_



Vertex: \_\_\_\_\_ Sides: \_\_\_\_\_