





## Habitats

Name \_\_\_\_\_

Write these food chains in the correct order. Then write the name of one producer, one primary and one predator in each food chain.

**1**







Wheat                  Sun                  Mouse                  Owl

\_\_\_\_\_ → \_\_\_\_\_ → \_\_\_\_\_

Producer                          Primary                          Predator

**2**







Zebra                  Lion                  Sun                  Grass

\_\_\_\_\_ → \_\_\_\_\_ → \_\_\_\_\_

Producer                          Primary                          Predator

**3**



Dolphin                  Seaweed                  Fish                  Sun

\_\_\_\_\_ → \_\_\_\_\_ → \_\_\_\_\_

Producer                          Primary                          Predator