

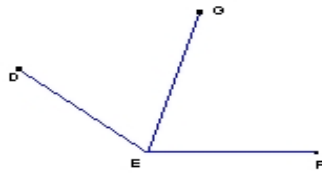
Name : _____

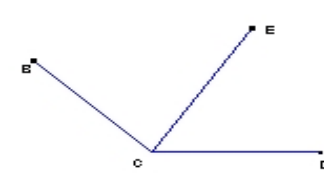
Score : _____


Teacher : _____

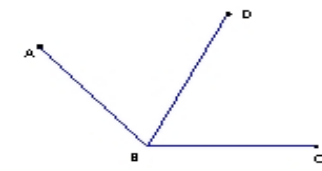
Date : _____

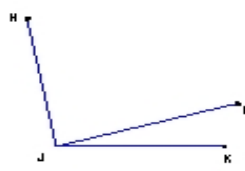
Find the missing angle measurement using the angle addition postulate.

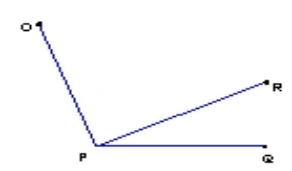
1) 
 $\angle DEG = \underline{66^\circ}$
 $\angle GEF = \underline{\hspace{2cm}}$
 $\angle DEF = \underline{140^\circ}$

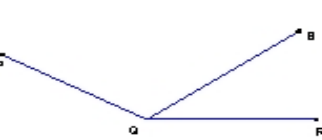
2) 
 $\angle BCE = \underline{77^\circ}$
 $\angle ECD = \underline{58^\circ}$
 $\angle BCD = \underline{\hspace{2cm}}$

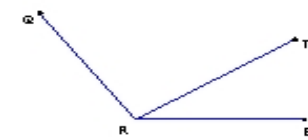
3) 
 $\angle GHK = \underline{71^\circ}$
 $\angle KHJ = \underline{19^\circ}$
 $\angle GHJ = \underline{\hspace{2cm}}$

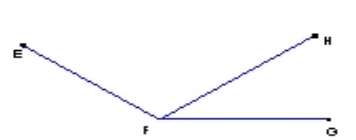
4) 
 $\angle ABD = \underline{\hspace{2cm}}$
 $\angle DBC = \underline{65^\circ}$
 $\angle ABC = \underline{130^\circ}$

5) 
 $\angle HJL = \underline{\hspace{2cm}}$
 $\angle LJK = \underline{17^\circ}$
 $\angle HJK = \underline{100^\circ}$

6) 
 $\angle OPR = \underline{84^\circ}$
 $\angle RPQ = \underline{26^\circ}$
 $\angle OPQ = \underline{\hspace{2cm}}$

7) 
 $\angle PQS = \underline{113^\circ}$
 $\angle SQR = \underline{\hspace{2cm}}$
 $\angle PQR = \underline{150^\circ}$

8) 
 $\angle QRT = \underline{92^\circ}$
 $\angle TRS = \underline{\hspace{2cm}}$
 $\angle QRS = \underline{125^\circ}$

9) 
 $\angle EFH = \underline{110^\circ}$
 $\angle HFG = \underline{35^\circ}$
 $\angle EFG = \underline{\hspace{2cm}}$