

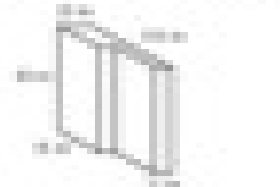


Calculating Volume

Name: _____ Date: _____


Calculate the volume of each solid.

111



Volume: _____

112




Volume: _____

113



Volume: _____

114



Volume: _____

115




Volume: _____

116



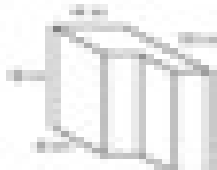
Volume: _____

117




Volume: _____

118




Volume: _____

119



Volume: _____

120




Volume: _____

121



Volume: _____

122



Volume: _____