

Name : _____

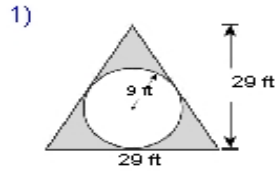
Score : _____

Teacher : _____

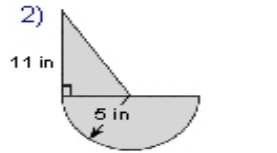
Date : _____

Compound Shapes

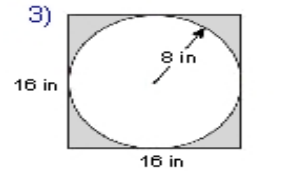
Find the area of each figure, round your answer to one decimal place if necessary.



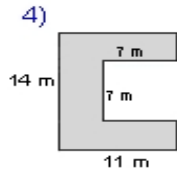
Area: _____



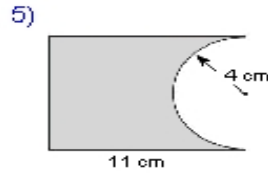
Area: _____



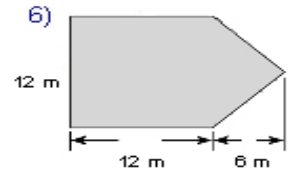
Area: _____



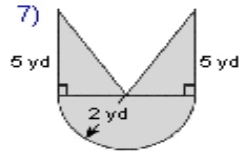
Area: _____



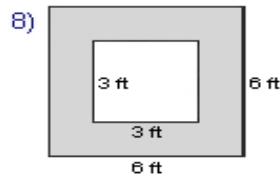
Area: _____



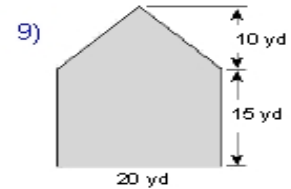
Area: _____



Area: _____



Area: _____



Area: _____