













That's A Fact

Directions: Solve the multiplication and division equations in each house. Do you notice a pattern?

 <p style="font-size: 1.2em; font-weight: bold;">36</p> <p>8 x _____ = 36 _____ x 4 = 36 36 ÷ 4 = _____ _____ ÷ 8 = 4</p>	 <p style="font-size: 1.2em; font-weight: bold;">45</p> <p>9 x _____ = 45 _____ x 9 = 45 45 ÷ 9 = _____ _____ ÷ 9 = 5</p>	 <p style="font-size: 1.2em; font-weight: bold;">72</p> <p>8 x _____ = 72 _____ x 9 = 72 72 ÷ 8 = _____ 72 ÷ 9 = _____</p>
 <p style="font-size: 1.2em; font-weight: bold;">48</p> <p>6 x _____ = 48 _____ x 8 = 48 48 ÷ 6 = _____ _____ ÷ 8 = 6</p>	 <p style="font-size: 1.2em; font-weight: bold;">30</p> <p>5 x _____ = 30 _____ x 6 = 30 30 ÷ 6 = _____ _____ ÷ 5 = 6</p>	 <p style="font-size: 1.2em; font-weight: bold;">40</p> <p>5 x _____ = 40 _____ x 8 = 40 40 ÷ 5 = _____ 40 ÷ 8 = _____</p>
 <p style="font-size: 1.2em; font-weight: bold;">54</p> <p>6 x _____ = 54 _____ x 9 = 54 54 ÷ 6 = _____ _____ ÷ 9 = 6</p>	 <p style="font-size: 1.2em; font-weight: bold;">63</p> <p>9 x _____ = 63 _____ x 7 = 63 63 ÷ 7 = _____ _____ ÷ 9 = 7</p>	 <p style="font-size: 1.2em; font-weight: bold;">42</p> <p>7 x _____ = 42 _____ x 6 = 42 42 ÷ 6 = _____ _____ ÷ 7 = 6</p>
 <p style="font-size: 1.2em; font-weight: bold;">56</p> <p>8 x _____ = 56 _____ x 8 = 56 56 ÷ 8 = _____ _____ ÷ 7 = 8</p>	 <p style="font-size: 1.2em; font-weight: bold;">28</p> <p>7 x _____ = 28 _____ x 4 = 28 28 ÷ 4 = _____ 28 ÷ 7 = _____</p>	 <p style="font-size: 1.2em; font-weight: bold;">60</p> <p>6 x _____ = 60 _____ x 6 = 60 60 ÷ 6 = _____ _____ ÷ 10 = 6</p>