

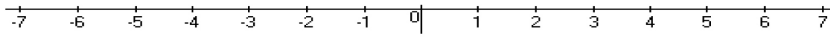
Student Name: \_\_\_\_\_

Score: \_\_\_\_\_

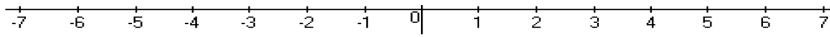
**Solve and Graph**

Work Space

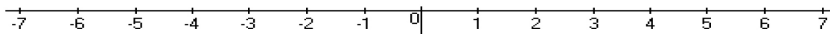
1)  $x - 3 < -2$



2)  $\frac{x}{5} \geq -1$



3)  $2 \leq x - 4$



4)  $-7x > -28$

