

GRADE _____

MATHS

4

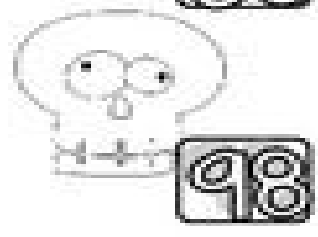

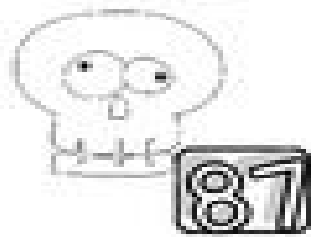


NAME:



**CIRCLE
THE ODDS
AND
EVEN NUMBERS**

**ODDS - ORANGE
EVEN - BLACK**



187 0003 9000