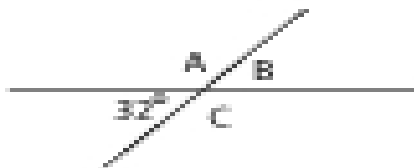




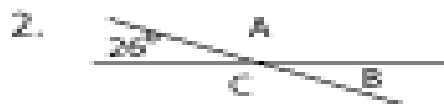
## Geometry Worksheet

Name \_\_\_\_\_

1. Find the angles of A, B, and C.



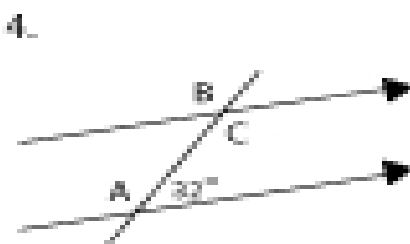
Answer: \_\_\_\_\_



Answer: \_\_\_\_\_



Answer: \_\_\_\_\_



Answer: \_\_\_\_\_