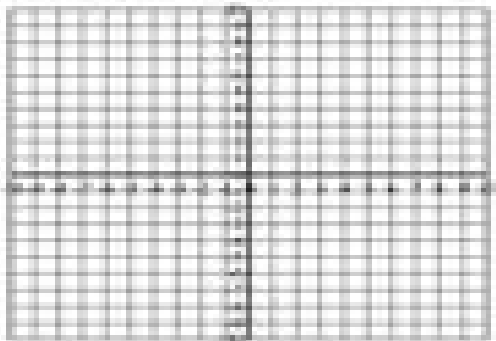



Graphing Linear Equations (A)

Graph each line.

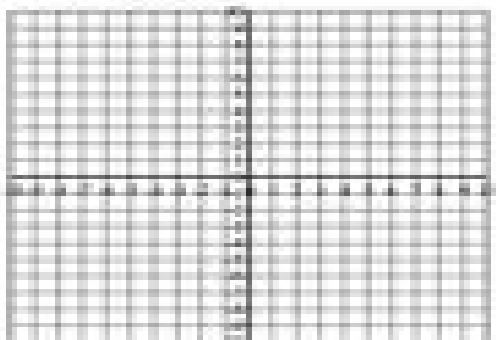
$$y = (-1/4)x + 2$$



$$y = (3/5)x + 4$$



$$y = (-1/5)x + 3$$



$$y = (3/2)x + 5$$

