



Name \_\_\_\_\_


Math 1. Addition and Subtraction


### 3-Digit Addition


Use the clues to find the sums.



$$\begin{array}{r} 350 \\ + 269 \\ \hline \end{array}$$


$$\begin{array}{r} 238 \\ + 462 \\ \hline \end{array}$$


$$\begin{array}{r} 420 \\ + 267 \\ \hline \end{array}$$


$$\begin{array}{r} 625 \\ + 34 \\ \hline \end{array}$$


$$\begin{array}{r} 543 \\ + 264 \\ \hline \end{array}$$


$$\begin{array}{r} 154 \\ + 128 \\ \hline \end{array}$$

# THANKSGIVING