



Name _____

Telling Time to the Half Hour


Put the clock hands on the clocks to show the correct time.




3:30




7:30




10:30



4:30

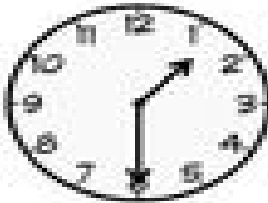


1:30




9:30

Look at the clocks. Print the time in DIGITAL form underneath.







*Remember: Digital time is written like ____ : ____