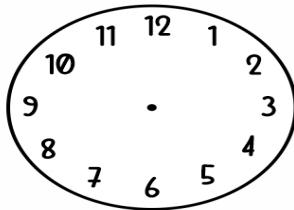


Name _____

Date _____

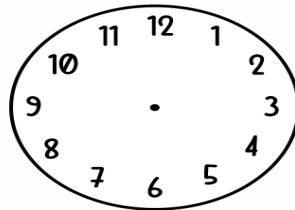
TELLING TIME - HALF HOURS

Draw the hands on the clock to show the time.



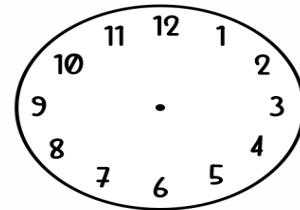
It's

4:30



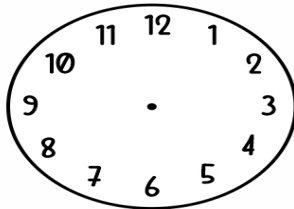
It's

11:30



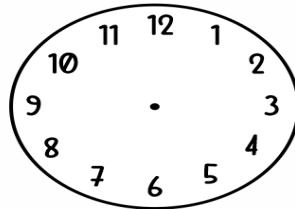
It's

7:30



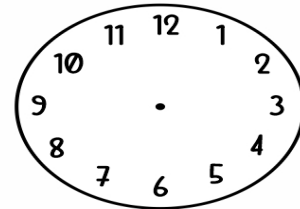
It's

3:30



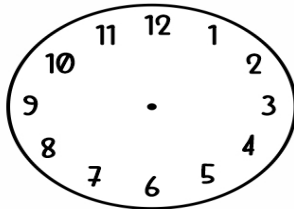
It's

12:30



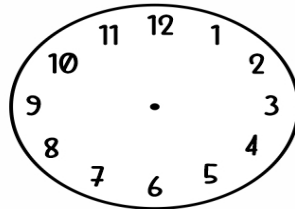
It's

2:30



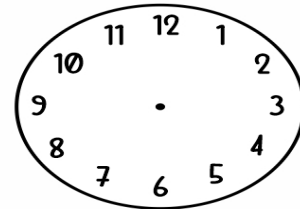
It's

6:30



It's

10:30



It's

4:30