




Name: \_\_\_\_\_

Can you tell the time to the nearest 5 minutes?  
Worksheet 1


1




2



3



4




5



6




7



8



9



10



11



12

