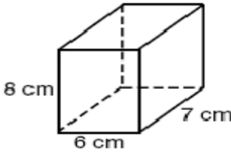
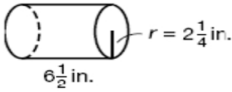
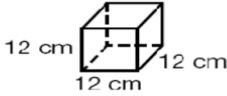
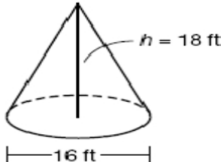
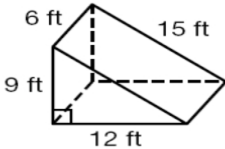
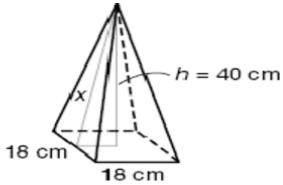
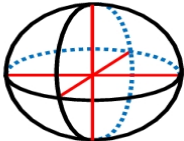
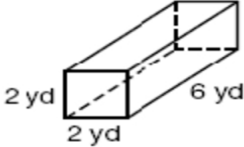
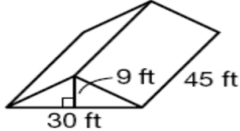


**3D Practice Worksheet**

**Homework #9GO - 7**

| Setup the formulas to find the <i>Surface Area</i> and <i>Volume</i> .            |                                                                                   |                                                                                     |
|-----------------------------------------------------------------------------------|-----------------------------------------------------------------------------------|-------------------------------------------------------------------------------------|
|  |  |  |
| V =                                                                               | V =                                                                               | V =                                                                                 |
| SA =                                                                              | SA =                                                                              | SA =                                                                                |

| Setup the formulas to find the <i>Volume</i> .                                    |                                                                                   |                                                                                     |
|-----------------------------------------------------------------------------------|-----------------------------------------------------------------------------------|-------------------------------------------------------------------------------------|
|  |  |  |
| V =                                                                               | V =                                                                               | V =                                                                                 |

| Setup the formulas to find the <i>Volume</i> and <i>solve</i> .                     |                                                                                     |                                                                                       |
|-------------------------------------------------------------------------------------|-------------------------------------------------------------------------------------|---------------------------------------------------------------------------------------|
|  |  |  |
| V =                                                                                 | V =                                                                                 | V =                                                                                   |
| <u>Work</u>                                                                         | <u>Work</u>                                                                         | <u>Work</u>                                                                           |