

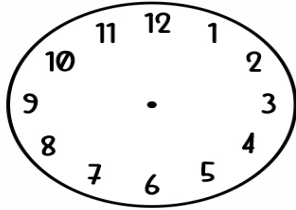
Name _____

Date _____

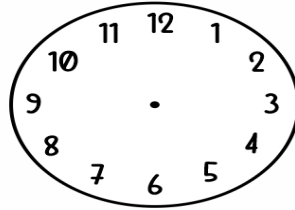


Lets draw the TIME

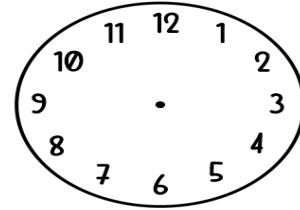
Draw the hands in the correct place for each clock.



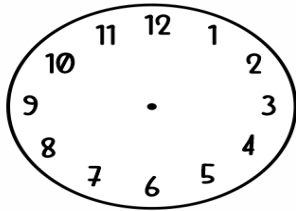
It's
half past 9



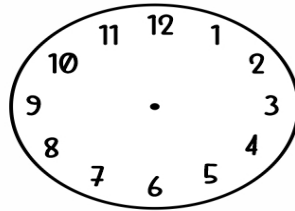
It's
half past 7



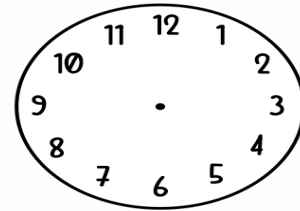
It's
half past 4



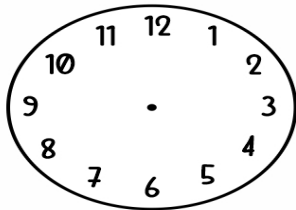
It's
9 o'clock



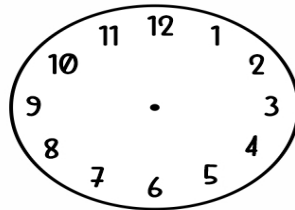
It's
7 o'clock



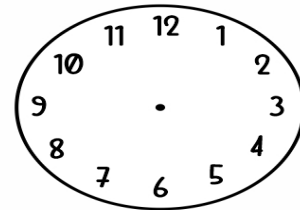
It's
4 o'clock



It's
half past 10



It's
3 o'clock



It's
half past 6