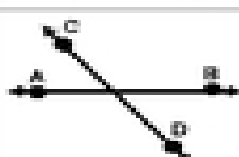


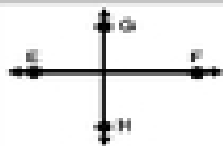





Name: \_\_\_\_\_

## Lines and Line Relationships Test

**Directions:** Match the figures and their names. Write the letter of each figure's name on the line in front of it.

	Figure
___ 1.	
___ 2.	
___ 3.	
___ 4.	
___ 5.	
___ 6.	
___ 7.	

### Names of Figures

A. point

B. line

C. ray

D. line segment

E. parallel lines

F. intersecting lines

H. perpendicular lines

© abcteach.com