

Find the value of  $x$ .




Find the value of  $x$ . Round to the nearest tenth.




Find the value of  $x$ . Round to the nearest tenth.



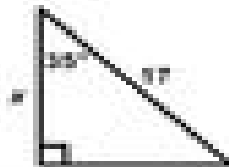
Find the value of  $x$ . Round to the nearest tenth.



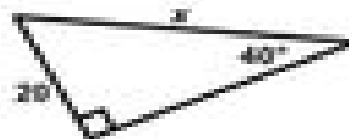
Find the value of  $x$ . Round to the nearest tenth.



Find the value of  $x$ . Round to the nearest tenth.



Find the value of  $x$ . Round to the nearest tenth.



Find the value of  $x$ . Round to the nearest tenth.



Find the value of  $x$ . Round to the nearest tenth.

