


Find the Missing Angles to the Nearest Degree

---

1.)




5.)



2.)



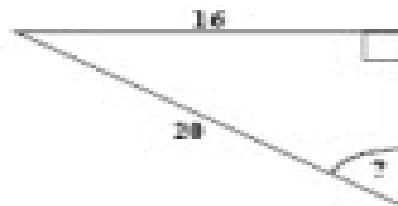
6.)



3.)



7.)



4.)



8.)

