







Lets of Clocks

Write each time.

Then write the clock's letter on the chart next to the matching time.



K	five after seven
	eight forty-five
	nine on-five
	nine twenty-five
	ten forty
	eleven thirty-five
	ten after twelve
	ten minutes before one
	one thirty
	two fifteen
	two forty
	three twenty



Remember! Imagine that ten minutes have passed since the next time for each clock.