





Name _____

Week 1 Month _____

	Monday	Tuesday	Wednesday	Thursday
Addition 1.OA.A	$3 + 2 = \underline{\quad}$ $1 + 2 = \underline{\quad}$ $1 + 1 = \underline{\quad}$	$2 + 1 = \underline{\quad}$ $3 + 2 = \underline{\quad}$ $4 + 2 = \underline{\quad}$	$3 + 3 = \underline{\quad}$ $8 + 2 = \underline{\quad}$ $4 + 3 = \underline{\quad}$	$3 + 0 = \underline{\quad}$ $4 + 3 = \underline{\quad}$ $4 + 2 = \underline{\quad}$
Place Value 1.NB.2	32 ____ Tens ____ Ones	31 ____ Tens ____ Ones	25 ____ Tens ____ Ones	14 ____ Tens ____ Ones
Number Patterns 1.NB.1	Fill in the missing numbers. $2 \underline{\quad} 4 \underline{\quad} 6$ $1 \underline{\quad} 3 \underline{\quad} 5$ $3 \underline{\quad} 5 \underline{\quad} 6$	Write the numbers that come next in the pattern. 7, 9, 11, 13, _____ _____	Write the numbers that come next in the pattern. 4, 8, 10, 12, _____ _____	Write the numbers that come next in the pattern. 6, 12, 18, 24, _____ _____
Skip Counting 1.NB.2	Count by 5s. 10 15 _____ 25 _____ 35 40 45	Count by 2s. 2 4 _____ 8 10 20 22 _____ 26	Count by 5s. 25 _____ 35 40 30 _____ 40 45	Count by 2s. 10 12 _____ 16 24 26 _____ 30
Time 1.MD.3	 7:00	 10:00	 4:00	 6:00