




Bar Graph



How many bananas are there?



The graph shows 6  The graph shows 2 


How many more oranges are there than bananas?


How many peaches are there?



How many apples are there altogether?

Ellen's marbles

How many  and  does she have altogether?

How many  does Ellen have?

How many  does Ellen have?

How many fewer  than  does she have?

banana apple pineapple orange pear

© DK Publishing (2012) 