

Name _____

Date _____



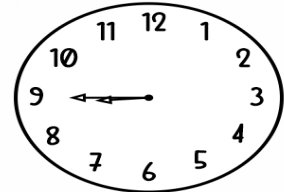
Let's matching up TIME

Match the digital clock and analog clock that shows the same time.

10:15

•

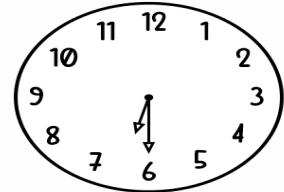
•



1:00

•

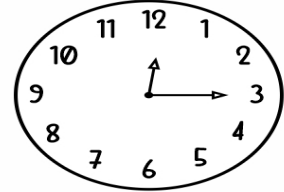
•



8:45

•

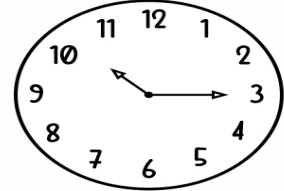
•



6:30

•

•



12:15

•

•

