


Date : _____

Name : _____




Score : _____

Choose the Correct Shape

Which of these is a Pentagon ?



Which of these is a Circle ?



Which of these is a Triangle ?

