

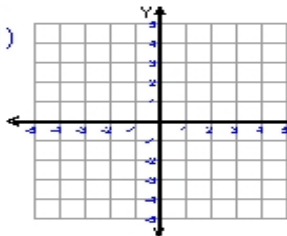
Name : _____

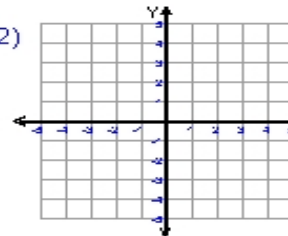
Score : _____

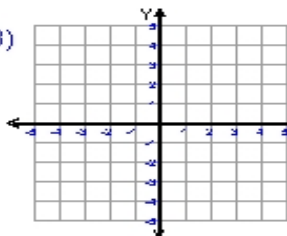
Teacher : _____

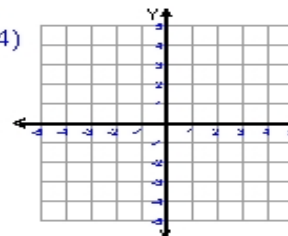
Date : _____

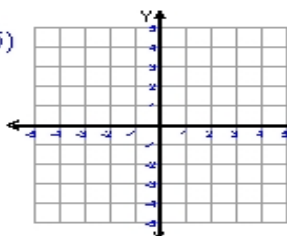
Sketch and Write the Equation For Each Line

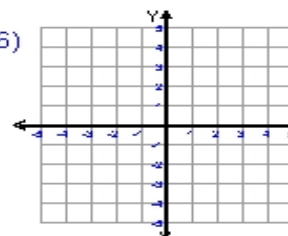
1)  equation _____
ordered pair = $(2, 4)$
ordered pair = $(1, 0)$
slope (m) = _____
y-intercept = $- 4$

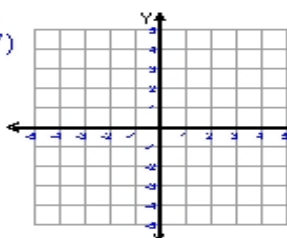
2)  equation _____
ordered pair = $(-4, -1)$
ordered pair = $(2, 4)$
slope (m) = _____
y-intercept = 3

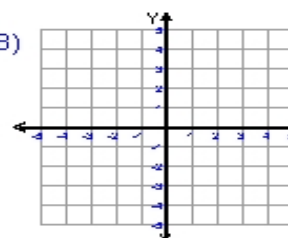
3)  equation _____
ordered pair = $(3, 3)$
ordered pair = $(-3, -1)$
slope (m) = _____
y-intercept = 1

4)  equation _____
ordered pair = $(3, -3)$
ordered pair = $(-3, 5)$
slope (m) = _____
y-intercept = 1

5)  equation _____
ordered pair = $(5, -4)$
ordered pair = $(-5, 0)$
slope (m) = _____
y-intercept = $- 2$

6)  equation _____
ordered pair = $(2, -4)$
ordered pair = $(1, 0)$
slope (m) = _____
y-intercept = 4

7)  equation _____
ordered pair = $(3, 0)$
ordered pair = $(-1, 4)$
slope (m) = _____
y-intercept = 3

8)  equation _____
ordered pair = $(-3, 3)$
ordered pair = $(3, -5)$
slope (m) = _____
y-intercept = $- 1$

