






Name \_\_\_\_\_

Period \_\_\_\_\_

**Identify That Rock – Complete the table.**

Picture	Rock Name	Rock Group	Formation
 <p>1. What is this rock? Write the name of the rock.</p>	<p>Choose the correct rock name:</p> <p>A. Basalt            B. Granite            C. Limestone            D. Gneiss            E. Conglomerate</p>	<p>Choose igneous, Metamorphic or Sedimentary</p>	<p>Show the rock group form:</p>
 <p>2. What is this rock called? Write the name of the rock.</p>	<p>Choose the correct rock name:</p> <p>A. Basalt            B. Granite            C. Limestone            D. Gneiss            E. Conglomerate</p>		
 <p>3. What is this rock called? Write the name of the rock.</p>	<p>Choose the correct rock name:</p> <p>A. Basalt            B. Granite            C. Limestone            D. Gneiss            E. Conglomerate</p>		
 <p>4. What is this rock called? Write the name of the rock.</p>	<p>Choose the correct rock name:</p> <p>A. Basalt            B. Granite            C. Limestone            D. Gneiss            E. Conglomerate</p>		
 <p>5. What is this rock called? Write the name of the rock.</p>	<p>Choose the correct rock name:</p> <p>A. Basalt            B. Granite            C. Limestone            D. Gneiss            E. Conglomerate</p>		