


Using the 2 times table




How many eyes?




 $3 \times 2 = 6$ eyes




 $\square \times \square = \square$ eyes




 $\square \times \square = \square$ eyes



 $\square \times \square = \square$ eyes




 $\square \times \square = \square$ eyes



 $\square \times \square = \square$ eyes

Draw your own pictures to match these number sentences.

$2 \times 2 = 4$



$10 \times 2 = 20$

$3 \times 2 = 6$

$7 \times 2 = 14$