



# What's the angle? .....

1. Name each angle


2. Measure these angles using a protractor. The first one is done for you.




a 90°  
Right angle



b \_\_\_\_\_




c \_\_\_\_\_



d \_\_\_\_\_



e \_\_\_\_\_



f \_\_\_\_\_



g \_\_\_\_\_




h \_\_\_\_\_



i \_\_\_\_\_



j \_\_\_\_\_



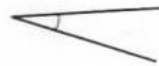
k \_\_\_\_\_



l \_\_\_\_\_



m \_\_\_\_\_



n \_\_\_\_\_



o \_\_\_\_\_