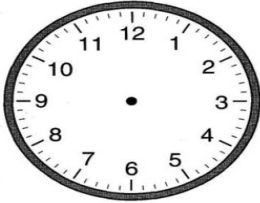


Name \_\_\_\_\_

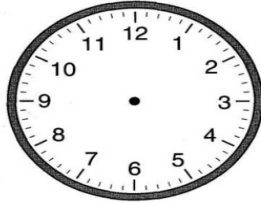
CCSS 2.MD.7 Tell and write time from analog and digital clocks to the nearest...

### Telling Time

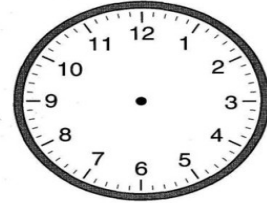
→ Directions: Draw in the minute and hour hands to match the digital time.




5:30



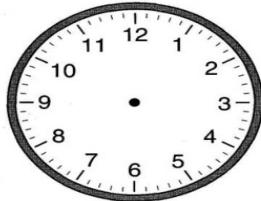
11:30



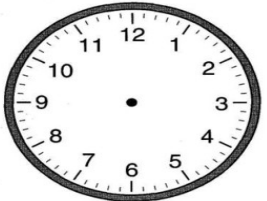
8:30



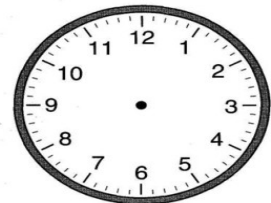
10:30



1:30




6:30



3:30



12:30



9:30

