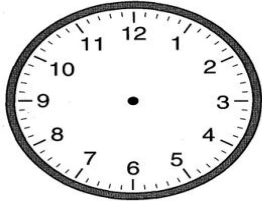


Name: _____

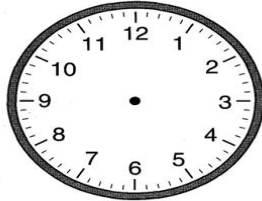
CCSS 2.MD.7 Tell and write time from analog and digital clocks to the nearest....

Telling Time to Quarter Hour

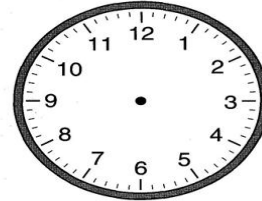
Directions: Draw in the minute and hour hands to match the digital time.



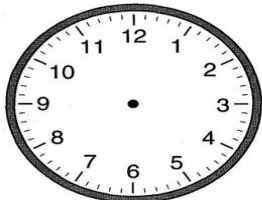
8:15



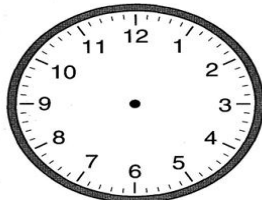
6:45




1:45



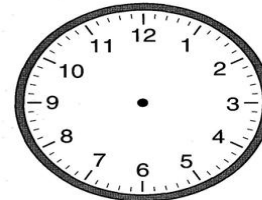
5:15



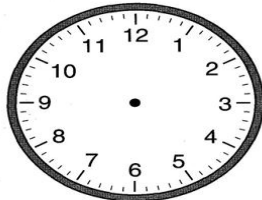
12:45




4:15



9:45



10:15



2:15