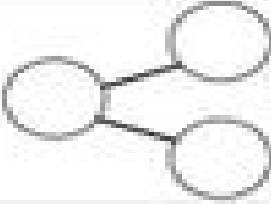
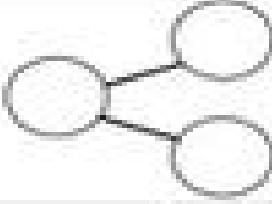
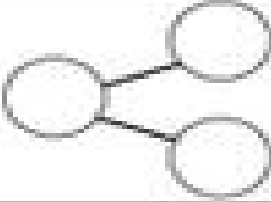
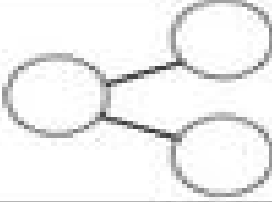

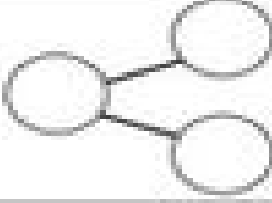
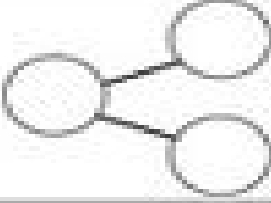
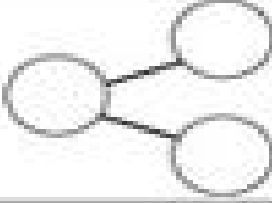
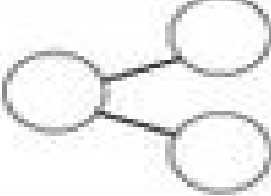


Name: \_\_\_\_\_

Date: \_\_\_\_\_

Use the number bonds to help you solve the problems.

$\_ \_ + 3 = 9$		$\_ \_ + 1 = 5$	
$\_ \_ + 2 = 8$		$4 + \_ \_ = 10$	
$6 + \_ \_ = 8$		$7 + \_ \_ = 10$	
$\_ \_ + 2 = 7$		$9 + \_ \_ = 10$	
$\_ \_ + 5 = 10$		$2 + \_ \_ = 5$	