

Name : \_\_\_\_\_

Score : \_\_\_\_\_

Teacher : \_\_\_\_\_

Date : \_\_\_\_\_

Name the vertex and sides of each angle.



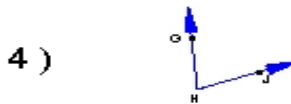
\_\_\_\_\_



\_\_\_\_\_

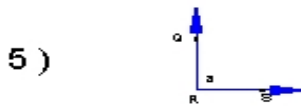


\_\_\_\_\_

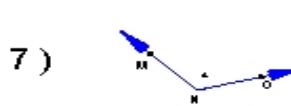


\_\_\_\_\_

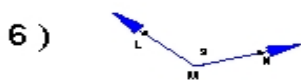
Name each angle in four ways.



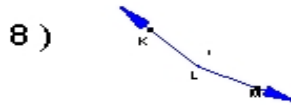
\_\_\_\_\_



\_\_\_\_\_

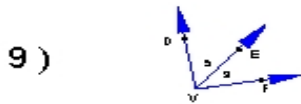


\_\_\_\_\_



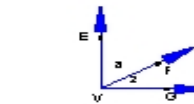
\_\_\_\_\_

Name all the angles that have V as a vertex.

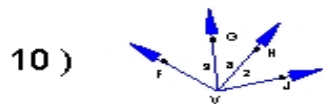


\_\_\_\_\_

11)

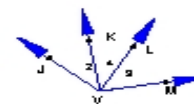


\_\_\_\_\_



\_\_\_\_\_

12)



\_\_\_\_\_