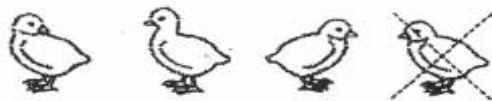
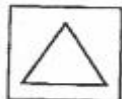


5




- (A)
- (B)
- (C)
- (D)

6



- (A)
- (B)
- (C)
- (D)

7



- (A) 10
- (B) 8
- (C) 6
- (D) 4

Directions: Have children mark the best answer. ✎ There are 4 baby chicks in all. One chick went to find some food. How many are left? ⓐ Which shape matches the shape on the card? 🦗 Count. How many dots?