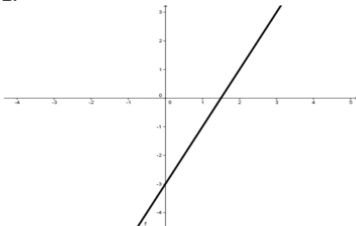
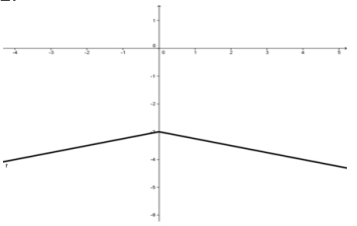
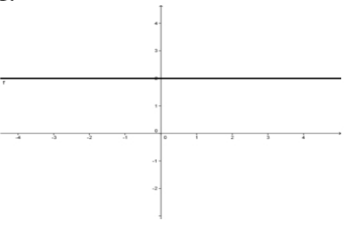
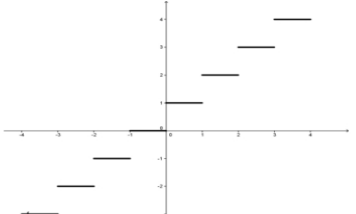
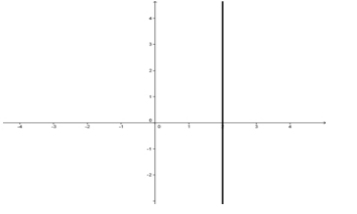
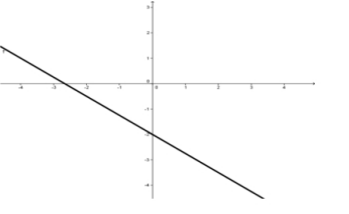
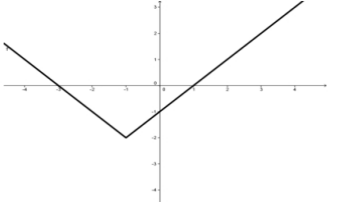
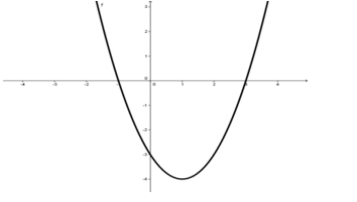
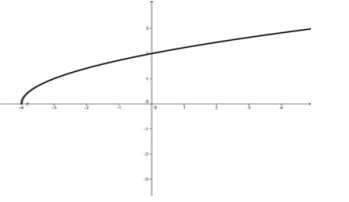


Algebra III Section 2.3  
 Domain and Range Worksheet Use interval notation.

Name \_\_\_\_\_  
 Period \_\_\_\_\_ Date \_\_\_\_\_

|   |   |   |
|---|---|---|
| <p>1.</p>    | <p>2.</p>    | <p>3.</p>    |
| <p>Domain _____<br/>                     Range _____</p>                                      | <p>Domain _____<br/>                     Range _____</p>                                      | <p>Domain _____<br/>                     Range _____</p>  |
| <p>4.</p>   | <p>5.</p>   | <p>6.</p>   |
| <p>Domain _____<br/>                     Range _____</p>                                      | <p>Domain _____<br/>                     Range _____</p>                                      | <p>Domain _____<br/>                     Range _____</p>  |
| <p>7.</p>  | <p>8.</p>  | <p>9.</p>  |
| <p>Domain _____<br/>                     Range _____</p>                                      | <p>Domain _____<br/>                     Range _____</p>                                      | <p>Domain _____<br/>                     Range _____</p>  |