




Name: \_\_\_\_\_


### Christmas Tree Addition


Directions: Solve the problems below.



$$\begin{array}{r} 53 \\ +16 \\ \hline \end{array}$$



$$\begin{array}{r} 24 \\ +23 \\ \hline \end{array}$$



$$\begin{array}{r} 19 \\ +16 \\ \hline \end{array}$$



$$\begin{array}{r} 22 \\ +38 \\ \hline \end{array}$$


$$\begin{array}{r} 46 \\ +18 \\ \hline \end{array}$$


$$\begin{array}{r} 36 \\ +33 \\ \hline \end{array}$$


$$\begin{array}{r} 63 \\ +42 \\ \hline \end{array}$$


$$\begin{array}{r} 38 \\ +12 \\ \hline \end{array}$$


$$\begin{array}{r} 17 \\ +12 \\ \hline \end{array}$$