


Name: _____


CCSS 3.OA.3 Use multiplication and division within 100 to solve

Multiplication Arrays


Directions: Color the array to find the product.



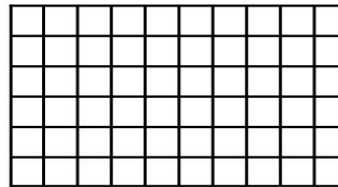
$3 \times 4 = \underline{\quad}$




$5 \times 5 = \underline{\quad}$



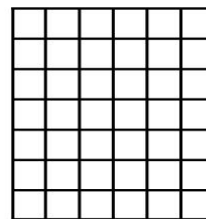
$2 \times 9 = \underline{\quad}$



$4 \times 10 = \underline{\quad}$



$8 \times 3 = \underline{\quad}$



$6 \times 4 = \underline{\quad}$