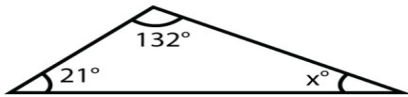


Name _____ Date _____

FINDING THE MISSING ANGLE

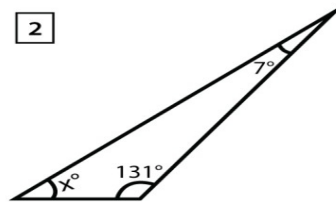
Find the missing angle in each triangle below!

1



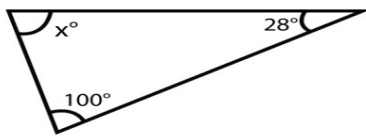
$$x^\circ = \underline{\hspace{2cm}}$$

2



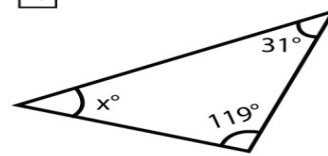
$$x^\circ = \underline{\hspace{2cm}}$$

3



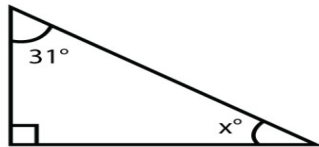
$$x^\circ = \underline{\hspace{2cm}}$$

4



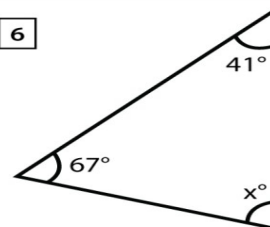
$$x^\circ = \underline{\hspace{2cm}}$$

5



$$x^\circ = \underline{\hspace{2cm}}$$

6



$$x^\circ = \underline{\hspace{2cm}}$$