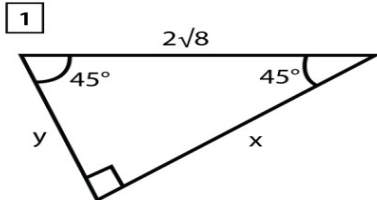


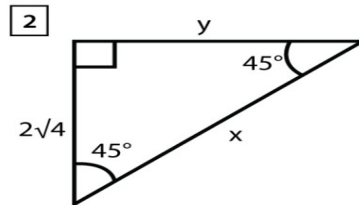
Name _____ Date _____

SPECIAL RIGHT TRIANGLE

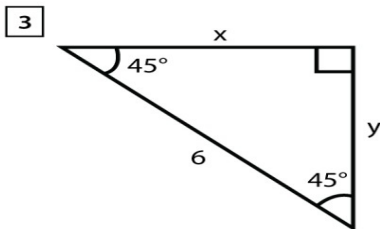
Calculate the unknown sides in the given special right triangles!



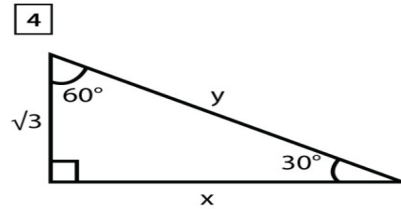
$x = \underline{\hspace{2cm}}, y = \underline{\hspace{2cm}}$



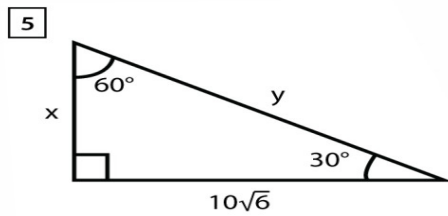
$x = \underline{\hspace{2cm}}, y = \underline{\hspace{2cm}}$



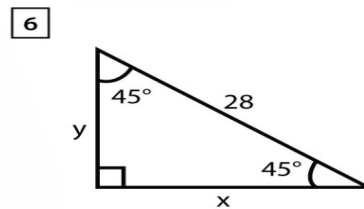
$x = \underline{\hspace{2cm}}, y = \underline{\hspace{2cm}}$



$x = \underline{\hspace{2cm}}, y = \underline{\hspace{2cm}}$



$x = \underline{\hspace{2cm}}, y = \underline{\hspace{2cm}}$



$x = \underline{\hspace{2cm}}, y = \underline{\hspace{2cm}}$