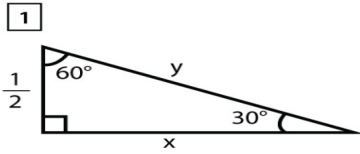


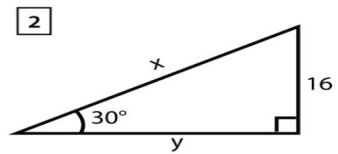
Name _____ Date _____

SPECIAL RIGHT TRIANGLE

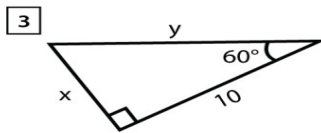
Find the value of the unknown variables!



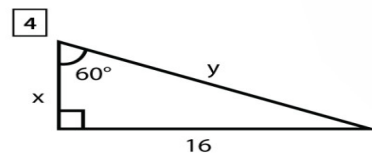
$x =$, $y =$



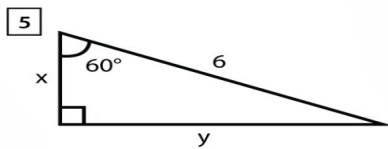
$x =$, $y =$



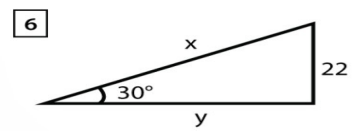
$x =$, $y =$



$x =$, $y =$



$x =$, $y =$



$x =$, $y =$