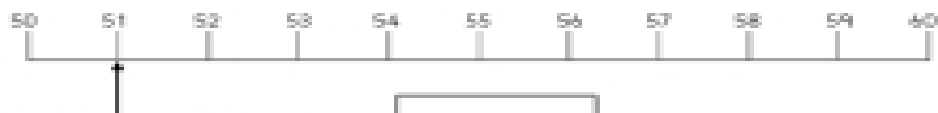
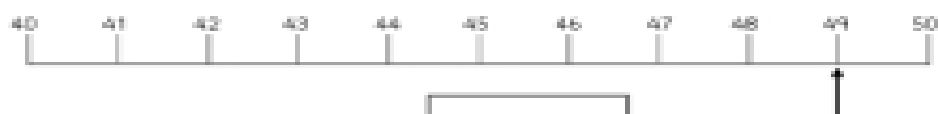



Rounding to the nearest ten



1. Is 51 nearer to 50 or 60 ?



2. Is 49 nearer to 40 or 50 ?



3. Is 76 nearer to 70 or 80 ?



4. Is 89 nearer to 80 or 90 ?