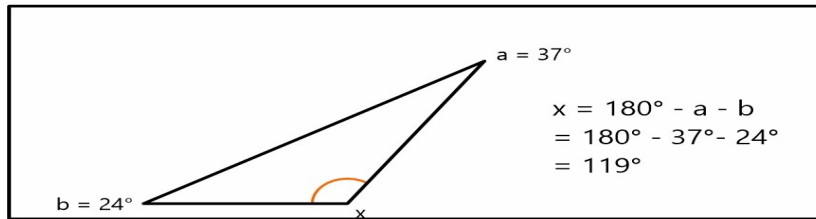


Name \_\_\_\_\_ Date \_\_\_\_\_

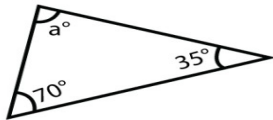
## TRIANGLE MISSING ANGLE



$$\begin{aligned}x &= 180^\circ - a - b \\ &= 180^\circ - 37^\circ - 24^\circ \\ &= 119^\circ\end{aligned}$$

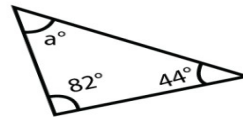
Find the missing angle of the triangles below!

1



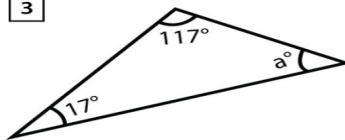
\_\_\_\_\_

2



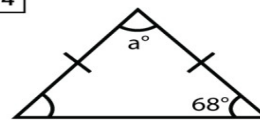
\_\_\_\_\_

3



\_\_\_\_\_

4



\_\_\_\_\_