


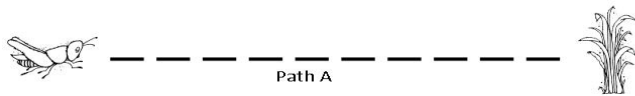
 Name: _____

CCSS 2.MD.3, CCSS 2.MD.4 Measure to determine how much longer....

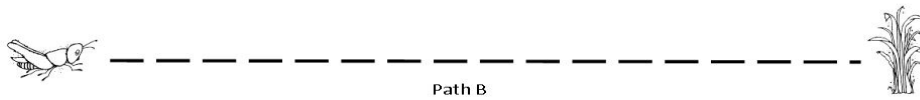
Measurement

 Directions: Estimate the length of the path (the dotted line) for Gary the grasshopper to reach the grass. Choose a tool and measure each path to record your result. Compare the lengths.

1. My estimate _____ Actual length _____



2. My estimate _____ Actual length _____



3. Which path was the longest path? _____

4. How much longer was path B than path A? Express your answer in units.
