

Name : \_\_\_\_\_

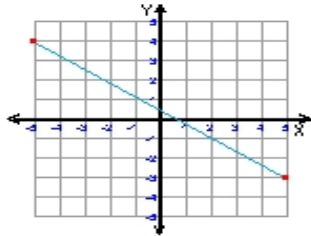
Score : \_\_\_\_\_

Teacher : \_\_\_\_\_

Date : \_\_\_\_\_

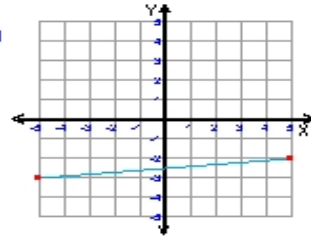
What is the slope of each line ?

1)



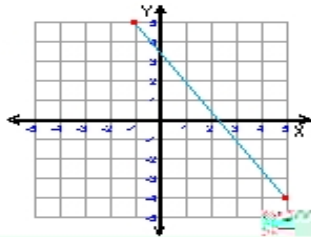
Slope = \_\_\_\_\_

2)



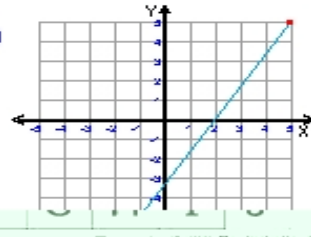
Slope = \_\_\_\_\_

3)



Slope = \_\_\_\_\_

4)



Slope = \_\_\_\_\_