




Name: \_\_\_\_\_

CCSS 3.OA.3 Use multiplication and division within 100 to solve .....

### Multiplication Picture Arrays

Directions: Circle the problem shown by the picture array.



$4 \times 5 = 20$

$6 \times 3 = 18$


$4 \times 6 = 24$



$2 \times 7 = 15$

$2 \times 7 = 14$

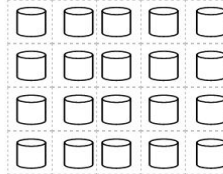
$7 \times 2 = 18$



$6 \times 3 = 18$

$6 \times 5 = 30$

$5 \times 3 = 15$



$4 \times 5 = 20$

$5 \times 5 = 25$


$5 \times 5 = 20$



$3 \times 4 = 12$

$3 \times 3 = 9$

$3 \times 3 = 12$



$5 \times 7 = 28$

$8 \times 4 = 30$

$5 \times 8 = 40$