

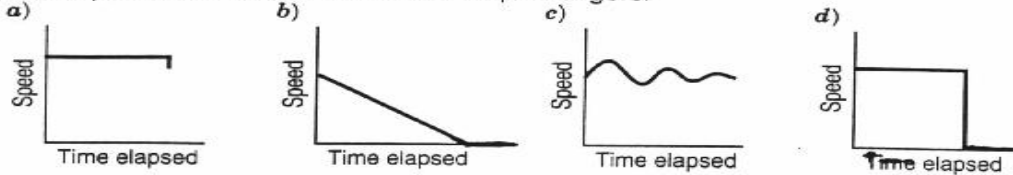
IDENTIFYING QUALITATIVE GRAPHS

NAME _____

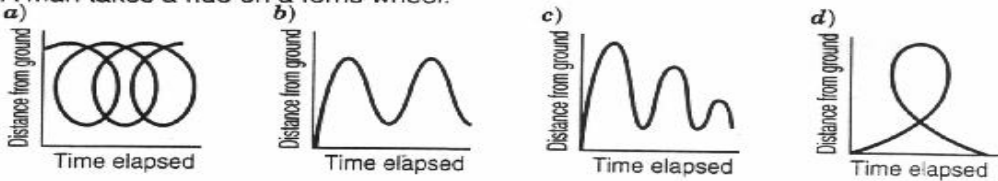
SHEET 1

Indicate which graph matches the statement.

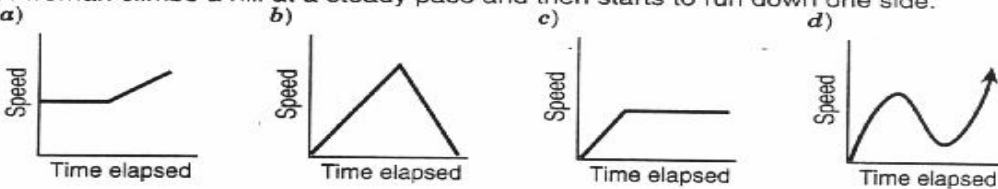
1. A train pulls into a station and lets off its passengers.



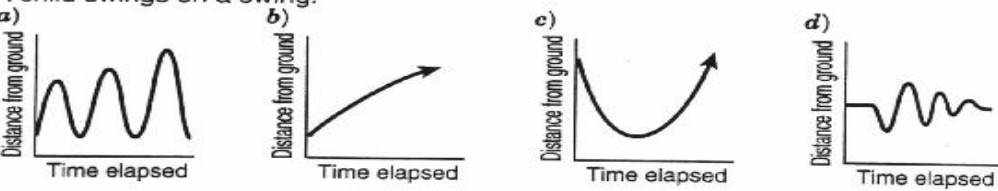
2. A man takes a ride on a ferris wheel.



3. A woman climbs a hill at a steady pace and then starts to run down one side.



4. A child swings on a swing.



5. A child climbs up a slide and then slides down.

