

Name

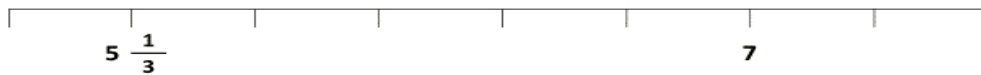
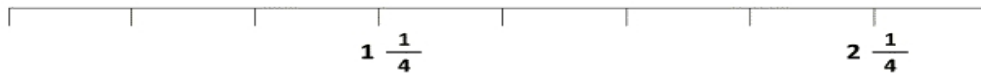

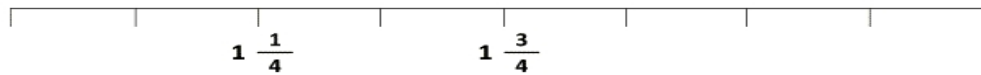
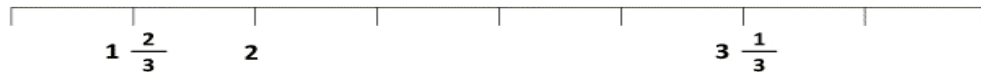
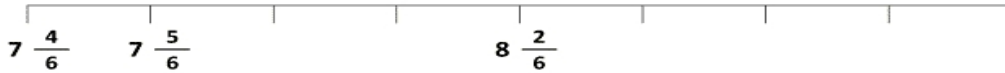
Date



FRACTION NUMBER LINES 4

Put in the missing fractions on these lines.

Please note that to aid understanding, the fractions have **not** been simplified on this sheet.



©2010 Math Salamanders Ltd.

MATH-SALAMANDERS.COM

