





Name \_\_\_\_\_

CCSS 3.OA.3 Use multiplication and division within 100 to solve

### Multiplication Arrays

⇒ How many cookies are there? Circle the multiplication problem illustrated in the picture.

	$2 \times 10 = 20$	$3 \times 5 = 15$
	$3 \times 6 = 15$	$4 \times 6 = 24$
	$2 \times 8 = 16$	$4 \times 6 = 24$
	$4 \times 4 = 16$	$5 \times 4 = 16$
	$6 \times 9 = 42$	$4 \times 4 = 16$
	$7 \times 6 = 42$	$6 \times 6 = 36$
	$3 \times 3 = 9$	$2 \times 10 = 20$
	$2 \times 5 = 10$	$5 \times 3 = 15$