









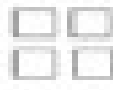










Name: _____

Hot Cocoa Addition

Directions: Add to find how many marshmallows are in each cup.

 _____ + _____ = _____	 _____ + _____ = _____		 _____ + _____ = _____	
 _____ + _____ = _____	 _____ + _____ = _____		 _____ + _____ = _____	
 _____ + _____ = _____	 _____ + _____ = _____		 _____ + _____ = _____	
 _____ + _____ = _____	 _____ + _____ = _____		 _____ + _____ = _____	