




Name _____

Date _____

Daily Math Review for 4th Grade

Week 1

Monday	<p>If you know $30 = 6 \times 5$, then 30 is 6 times as many as _____</p>	<p>Find the perimeter of the rectangle.</p>  <p>_____</p>
	<p>Round to the nearest ten thousand.</p> <p>24,305</p> <p>_____</p>	<p>Solve</p> $\begin{array}{r} 857 \\ + 195 \\ \hline \end{array}$
Tuesday	<p>Anna read 5 books. If her brother read 3 times as many books, how many did he read?</p>	<p>Circle the name of this geometric figure.</p>  <p>ray point line segment</p>
	<p>Circle each fraction that is equivalent to one half.</p> <p>$\frac{2}{4}$ $\frac{4}{8}$ $\frac{6}{8}$ $\frac{5}{10}$</p>	<p>Solve</p> $24 \times 8 = \underline{\hspace{2cm}}$
Wednesday	<p>Amber needs 50 tokens to buy a new game. She has already saved 25. If she saves 25 every week, she needs the bus. How many more weeks does she need to work to meet her goal?</p>	<p>Circle all shapes that contain at least one right angle.</p> 
	<p>Compare using <, =, or >.</p> <p>$\frac{2}{10}$ _____ $\frac{1}{10}$</p>	<p>Solve</p> $82 + 9 = \underline{\hspace{2cm}}$